

Dart Board Maths Scoring Rules:

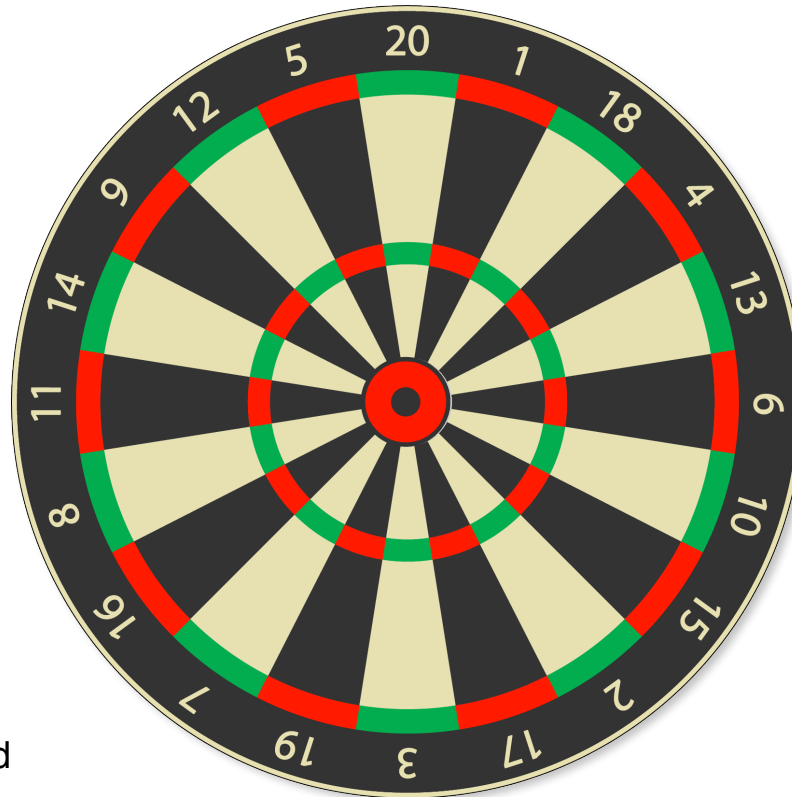
A player throws three darts per turn



If a dart lands on the black or white sections of a number, this is a **single** score.



If a dart lands on the outer red or green section of a number, this is a **double** score.



If a dart lands in the red section of the centre circle, this earns a score of **25**.




If a dart lands on the inner red or green section of a number, this is a **triple** score.



If a dart lands in the black section of the centre circle, this earns a score of **50**.


Dart Board Maths Sheet 1

1.



Total score:

2.



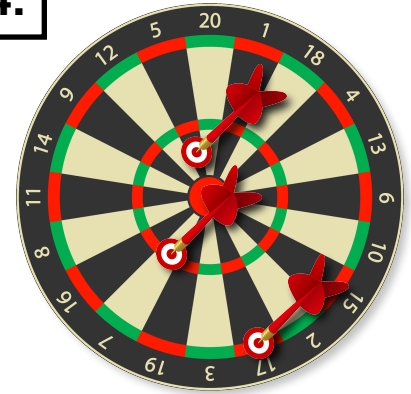
Total score:

3.



Total score:

4.



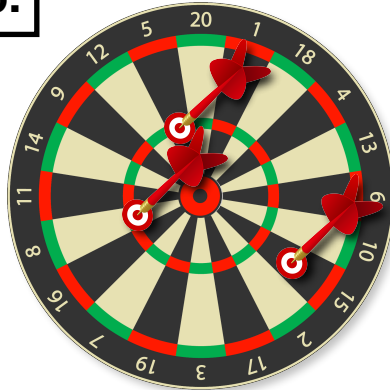
Total score:

5.



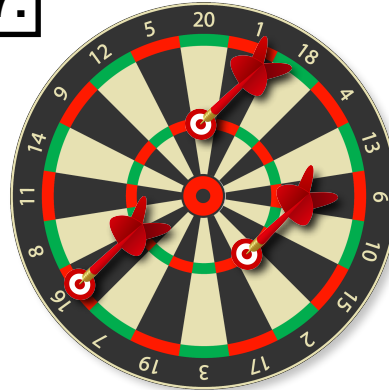
Total score:

6.



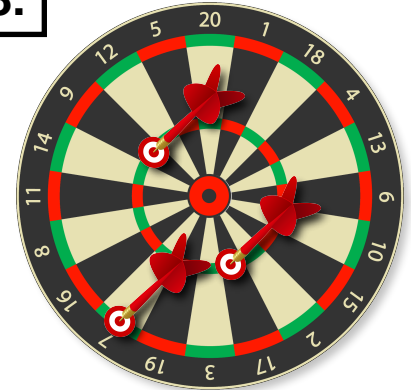
Total score:

7.



Total score:

8.



Total score:


Dart Board Maths Sheet 2

1.



Total score:

2.



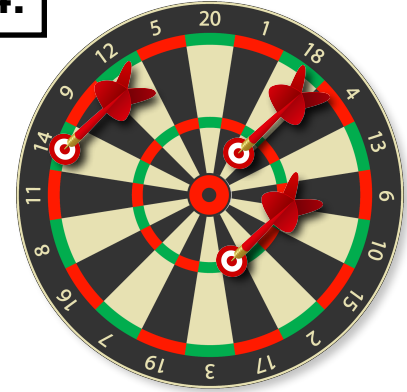
Total score:

3.



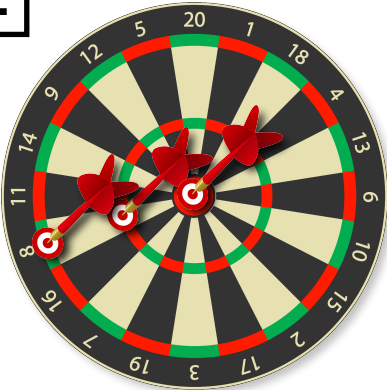
Total score:

4.



Total score:

5.



Total score:

6.



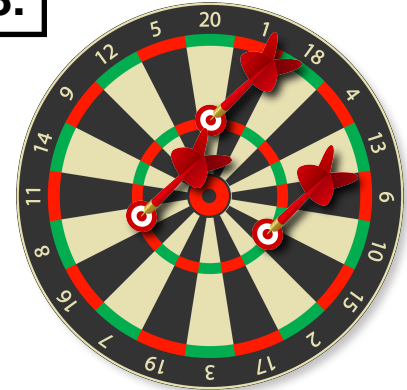
Total score:

7.



Total score:

8.



Total score:

Dart Board Maths Sheet 3

What **three** areas of the board would you need to hit to score exactly **95**?

Example answer:

<i>Double</i> 16	<i>Triple</i> 20	<i>Single</i> 3
---------------------	---------------------	--------------------

What **three** areas of the board would you need to hit to score exactly **70**?

--	--	--

What **three** areas of the board would you need to hit to score exactly **124**?

--	--	--

What **three** areas of the board would you need to hit to score exactly **53**?

--	--	--



What **three** areas of the board would you need to hit to score exactly **46**?

--	--	--

What **three** areas of the board would you need to hit to score exactly **135**?

--	--	--

What **three** areas of the board would you need to hit to score exactly **13**?

--	--	--

What **three** areas of the board would you need to hit to score exactly **88**?

--	--	--

What **three** areas of the board would you need to hit to score exactly **111**?

--	--	--

What **three** areas of the board would you need to hit to score exactly **34**?

--	--	--

Dart Board Maths Sheet 4

What **three** areas of the board would you need to hit to score exactly **95**?

Example answer:

<i>Double</i> 16	<i>Triple</i> 20	<i>Single</i> 3
---------------------	---------------------	--------------------

What **three** areas of the board would you need to hit to score exactly **63**?

--	--	--

What **three** areas of the board would you need to hit to score exactly **138**?

--	--	--

What **three** areas of the board would you need to hit to score exactly **89**?

--	--	--



What **three** areas of the board would you need to hit to score exactly **23**?

--	--	--

What **three** areas of the board would you need to hit to score exactly **118**?

--	--	--

What **three** areas of the board would you need to hit to score exactly **105**?

--	--	--

What **three** areas of the board would you need to hit to score exactly **149**?

--	--	--

What **three** areas of the board would you need to hit to score exactly **99**?


--	--	--

What **three** areas of the board would you need to hit to score exactly **150**?

--	--	--


ANSWERS Dart Board Maths Sheet 1

1.



Total score: **41**

2.



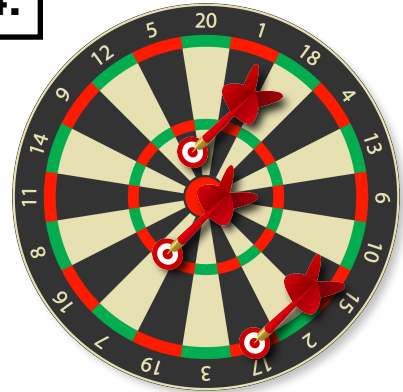
Total score: **106**

3.




Total score: **96**

4.



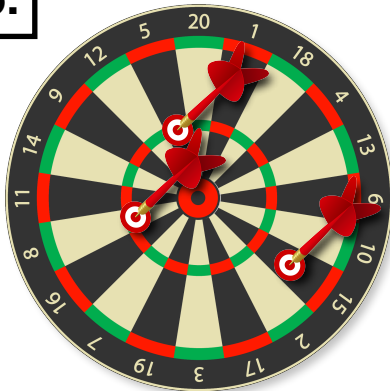
Total score: **60**

5.



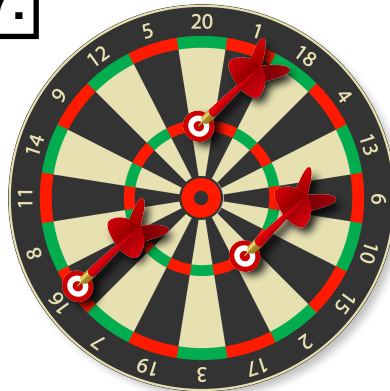
Total score: **45**

6.



Total score: **54**

7.



Total score: **98**

8.



Total score: **92**


ANSWERS Dart Board Maths Sheet 2

1.



Total score: **72**

2.



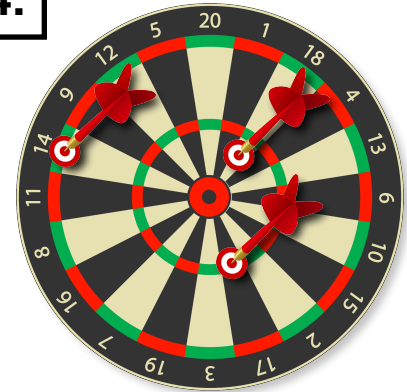
Total score: **66**

3.



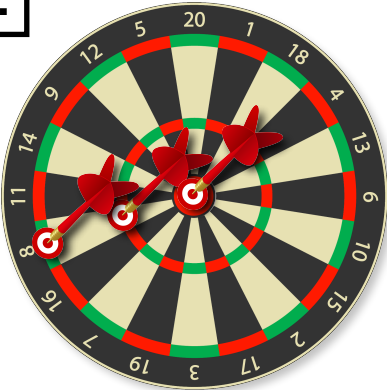
Total score: **16**

4.



Total score: **97**

5.



Total score: **90**

6.



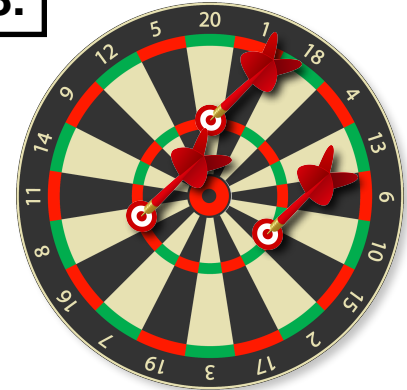
Total score: **99**

7.



Total score: **49**

8.



Total score: **129**